

1

In 1929, the astronomer Edwin Hubble observed that the light from galaxies moving away from the Earth had longer wavelengths than expected.

(a) What name is given to this effect?

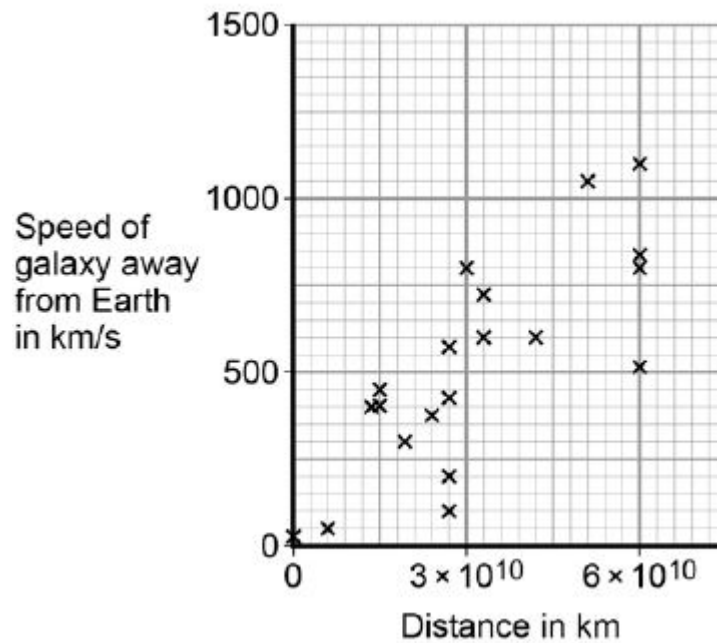
.....
.....

(1)

(b) From his observations, Hubble was able to calculate the speed of a galaxy and the distance of the galaxy from the Earth.

Figure 1 shows the results of Hubble's calculations.

Figure 1



What relationship between the speed of a galaxy and the distance is suggested by Hubble's results?

.....
.....

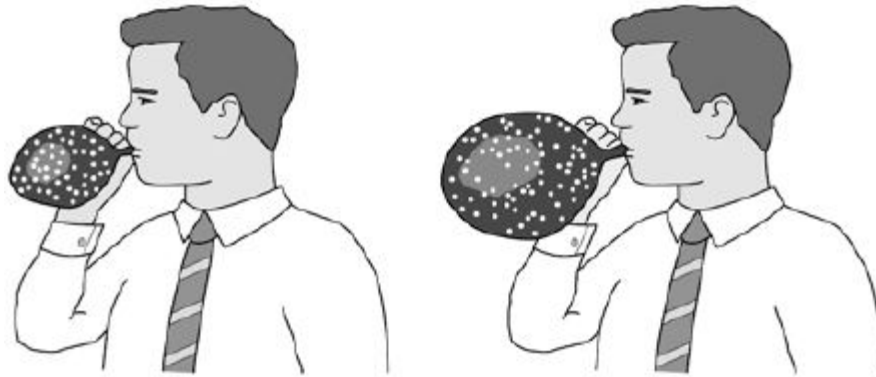
(1)

The observations made by Hubble support the idea that the Universe is expanding. This means that galaxies are continually moving away from each other and from the Earth.

Figure 2 shows a student using a balloon to model the idea of an expanding Universe.

Some dots, which represent galaxies, were marked on the balloon.
The balloon was then inflated.

Figure 2



(c) Give **one** strength and **one** weakness of this model in representing the idea of an expanding Universe.

Strength

.....

Weakness

.....

(2)

In the 1950s there were two main theories to explain how the Universe began.

Theory 1

The Universe has always existed, it is continually expanding. New galaxies are formed as older galaxies die out.

Theory 2

The Universe began from a very small region that was extremely hot and dense. The Universe has been expanding ever since.

(d) In what way do the observations made by Hubble support both Theory 1 and Theory 2?

.....

.....

.....

(1)

- (e) Most scientists now believe that Theory 2 is correct.
Suggest what is likely to have caused scientists to start thinking Theory 1 is wrong.

.....
.....
.....

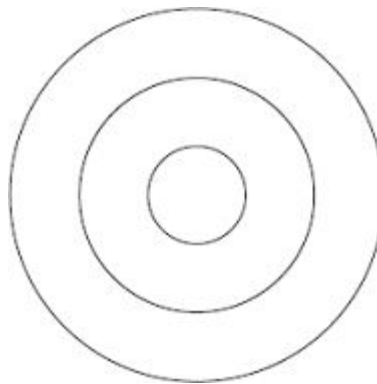
(1)
(Total 6 marks)

2

A teacher demonstrates the production of circular waves in a ripple tank.

Diagram 1 shows the waves at an instant in time.

Diagram 1



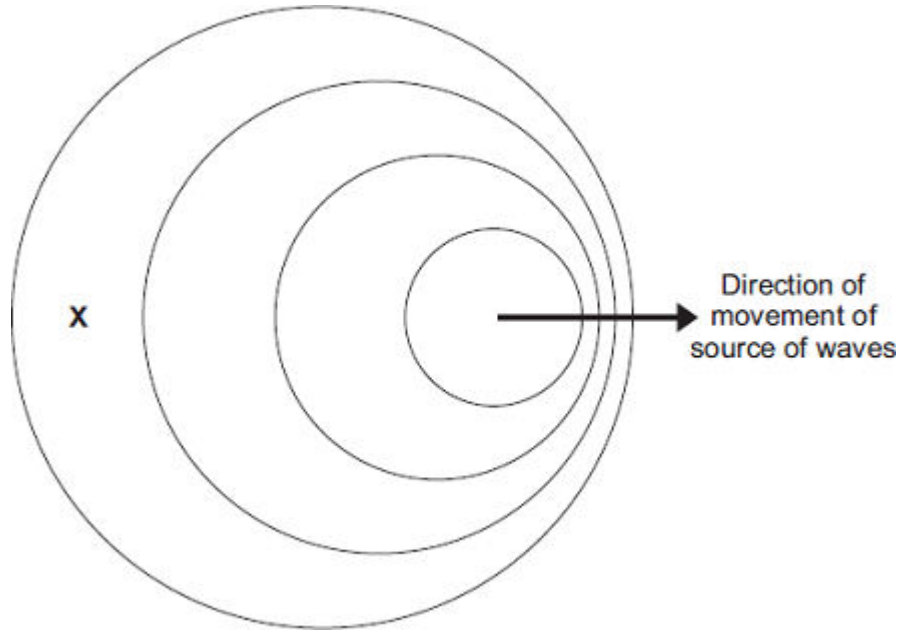
- (a) Show on **Diagram 1** the wavelength of the waves.

(1)

- (b) The teacher moves the source of the waves across the ripple tank.

Diagram 2 shows the waves at an instant in time.

Diagram 2
(Actual size)



- (i) Use the correct answer from the box to complete each sentence.

decreased	increased	stayed the same
-----------	-----------	-----------------

In **Diagram 2**, the observed wavelength of the waves at **X**

has

In **Diagram 2**, the frequency of the waves at **X**

has

(2)

- (ii) Take measurements from **Diagram 2** to determine the wavelength of the waves received at **X**.

Give the unit.

.....

.....

Wavelength =

(3)

- (c) The teacher uses the waves in the ripple tank to model the changes in the wavelengths of light observed from distant galaxies.

When observed from the Earth, there is an increase in the wavelength of light from distant galaxies.

- (i) State the name of this effect.

.....

(1)

- (ii) What does this increase in wavelength tell us about the movement of most galaxies?

.....

.....

(1)

- (iii) Explain how this observation supports the Big Bang theory of the formation of the Universe.

.....

.....

.....

.....

.....

.....

.....

.....

.....

.....

.....

.....

(4)

- (iv) State **one** other piece of evidence that supports the Big Bang theory of the formation of the Universe.

.....

.....

(1)

(Total 13 marks)

3

(a) Observation of the spectra from distant galaxies provides evidence to support the 'Big Bang' theory.

(i) Complete the following sentence.

Many scientists think that the 'Big Bang' theory describes the

.....

(1)

(ii) Tick (✓) **one** box to complete the sentence.

The discovery of cosmic microwave background radiation was important because it ...

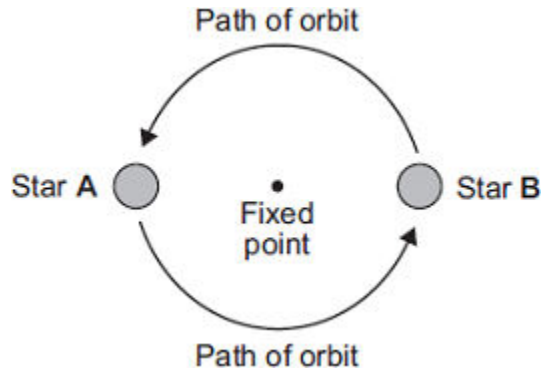
proved the 'Big Bang' theory to be correct.

provided more evidence to support the 'Big Bang' theory.

proved the Universe will continue to expand forever.

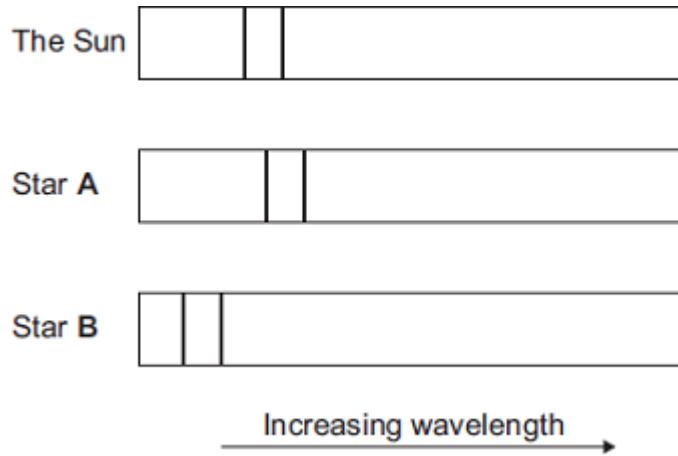
(1)

(b) Many stars are part of a binary star system. Binary star systems have two stars.



The visible spectrum from stars includes dark lines. These lines are at specific wavelengths.

The diagram shows the position of two dark lines in the spectrum from the Sun. It also shows the same lines in the spectra from two stars **A** and **B** in a binary star system at the same point in time.



(i) What name is given to the effect shown in the spectrum from star **A**?

.....

(1)

- (ii) Scientists have concluded that the two stars in a binary star system orbit around a fixed point between the two stars.

A comparison of the spectra from the two stars in a binary star system provides evidence to support this conclusion.

Explain how.

.....

.....

.....

.....

.....

.....

.....

.....

(3)
(Total 6 marks)

4

- (a) Scientists have observed that the wavelengths of the light from galaxies moving away from the Earth are longer than expected.

- (i) What name is given to this observation?

.....

(1)

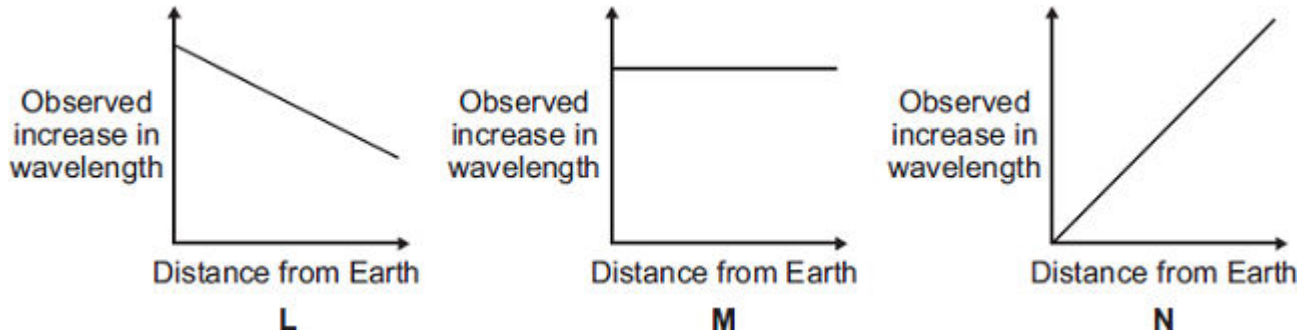
- (ii) Draw a ring around the correct answer to complete each sentence.

This observation gives scientists evidence that

light can be stretched.
galaxies are changing colour.
the Universe is expanding.

(1)

(iii) There is a pattern linking the size of the observed increase in the wavelengths of light from a galaxy and the distance the galaxy is from the Earth.



Which **one** of the graphs, **L**, **M** or **N**, shows the correct pattern?

Write the correct answer in the box.

(1)

(b) Observations help scientists answer questions about the Universe.

Scientists **cannot** answer every question.

Which **one** of the following questions **cannot** be answered by scientists?

Tick (✓) **one** box.

How old is the Universe?

Why was the Universe created?

How fast does light travel through the Universe?

(1)

(Total 4 marks)

5

Galaxies emit all types of electromagnetic wave.

(a) (i) Which type of electromagnetic wave has the shortest wavelength?

.....

(1)

(ii) State **one** difference between an ultraviolet wave and a visible light wave.

.....
.....

(1)

(b) Electromagnetic waves travel through space at a speed of 3.0×10^8 m/s.

The radio waves emitted from a distant galaxy have a wavelength of 25 metres.

Calculate the frequency of the radio waves emitted from the galaxy and give the unit.

.....
.....
.....

Frequency =

(3)

(c) Scientists use a radio telescope to measure the wavelength of the radio waves emitted from the galaxy in part (b) as the waves reach the Earth. The scientists measure the wavelength as 25.2 metres. The effect causing this observed increase in wavelength is called red-shift.

(i) The waves emitted from most galaxies show red-shift.

What does red-shift tell scientists about the direction most galaxies are moving?

.....
.....

(1)

(ii) The size of the red-shift is **not** the same for all galaxies.

What information can scientists find out about a galaxy when they measure the size of the red-shift the galaxy produces?

.....
.....
.....
.....

(2)

(iii) What does the observation of red-shift suggest is happening to the Universe?

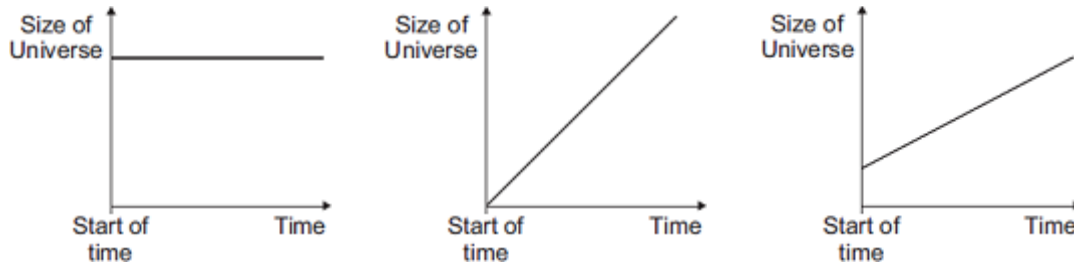
.....
.....

(1)
(Total 9 marks)

6

The 'big bang' theory is one theory explaining the origin of the Universe.

(a) The graphs X, Y and Z, show how the size of the Universe may have changed with time.



Which graph would the 'big bang' theory suggest is correct?

Write your answer, X, Y or Z, in the box.

Explain the reason for your answer.

.....
.....
.....
.....

(3)

(b) In 1948, an alternative to the 'big bang' theory, called the 'steady state' theory, was developed.

The 'steady state' theory suggested that the Universe, although expanding, has always existed without a beginning in time.

(i) Complete the following sentence by drawing a ring around the correct line in the box.

The measurement of red-shift in the light from distant galaxies provides evidence

to support

- only the 'big bang' theory.
- only the 'steady state' theory.
- both the 'big bang' and 'steady state' theories.

(1)

(ii) In 1965, scientists rejected the 'steady state' theory in favour of the 'big bang' theory.

Suggest what might cause scientists to stop supporting one theory and to start supporting an alternative theory.

.....
.....
.....

(1)
(Total 5 marks)

7

(a) The 'Big Bang' theory uses red-shift as evidence to explain the beginning of the Universe.

How does the red-shift from distant galaxies provide evidence for the beginning of the Universe?

.....
.....
.....
.....
.....
.....

(3)

(b) Cosmic microwave background radiation (CMBR) is a type of electromagnetic radiation. CMBR fills the Universe. It was first discovered in 1965 by two astronomers called Penzias and Wilson.

(i) What do scientists believe is the origin of CMBR?

.....
.....

(1)

(ii) Why was the discovery of CMBR so important to the scientists believing the 'Big Bang' theory to be correct?

.....
.....

(1)

(iii) How is the wavelength of CMBR likely to change, if at all, over the next billion years?

.....

Give a reason for your answer.

.....

.....

(2)
(Total 7 marks)

8

Optical telescopes may be used to observe galaxies. Some optical telescopes are on the Earth and some are on satellites in space.

Scientists have observed that the wavelengths of the light from galaxies moving away from the Earth are longer than expected. This observation is called red-shift.

(i) What does the size of the red-shift tell the scientists about the distance a galaxy is from the Earth?

.....

.....

(1)

(ii) Complete the following passage.

Red-shift provides evidence to support the 'big bang' theory. The 'big bang' theory is one of the ways of explaining the of the Universe.

(1)

(Total 2 marks)

9

The 'Big Bang' theory is one theory of the origin of the Universe.

(a) (i) Explain what is meant by the 'Big Bang' theory.

.....

.....

.....

.....

(2)

- (ii) The light arriving from distant galaxies provides scientists with evidence to support the 'Big Bang' theory.

Explain how.

.....

.....

.....

.....

(2)

- (b) At a meeting held in 2005, a group of scientists claimed that new data had been collected that showed the 'Big Bang' theory to be wrong. Other scientists said that there was no reason to doubt the 'Big Bang' theory.

What should scientists do when a theory does **not** appear to be supported by new data?

.....

.....

.....

.....

(2)

- (c) Scientists can answer many questions about the Universe, but not the question:

Why was the Universe created?

Suggest a reason why this question **cannot** be answered by scientists.

.....

.....

(1)

(Total 7 marks)

10

- (a) Scientists use telescopes to observe stars and galaxies. Some telescopes are on Earth, but some are on satellites in space.

Why do telescopes in space give better images than telescopes on the Earth?

.....

.....

(1)

(b) Scientists have observed that the wavelengths of the light given out from galaxies that are moving away from the Earth are longer than expected.

(i) What name is given to this observation?

Put a tick (✓) in the box next to your answer.

blue-shift

green-shift

red-shift

(1)

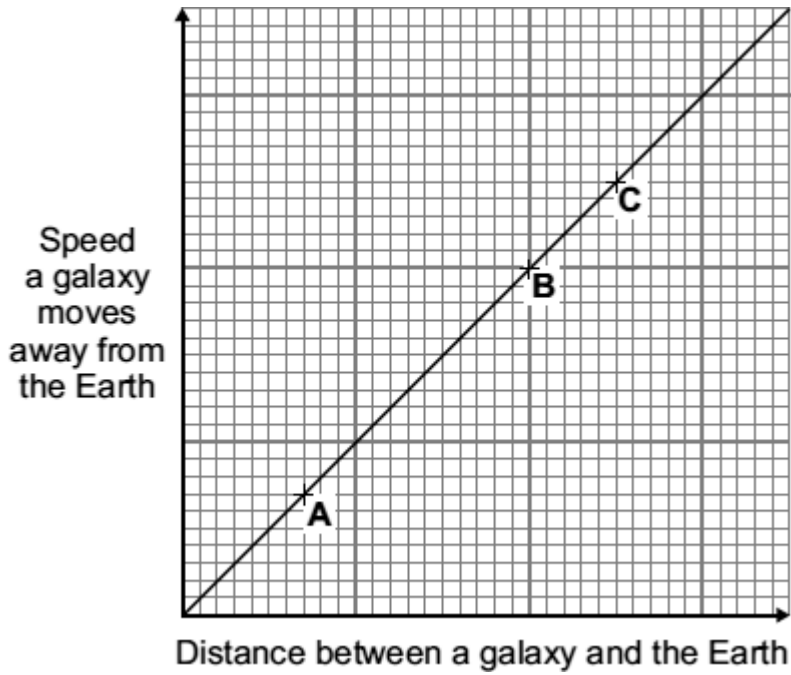
(ii) Complete the following sentence by drawing a ring around the correct line in the box.

This observation gives evidence for the idea that the universe is

shrinking.
not changing.
expanding.

(1)

(c) Use the graph to answer the following questions.



(i) What is the link between the speed that a galaxy moves away from the Earth and the distance between the galaxy and the Earth?

.....
.....

(1)

(ii) The positions of three galaxies, **A**, **B** and **C**, are marked on the graph.

From which galaxy, **A**, **B** or **C**, would the wavelength of the light reaching the Earth seem to have changed the most?

Galaxy

Give a reason for your answer.

.....
.....
.....
.....

(2)
(Total 6 marks)

11

- (a) In 1929, the astronomer Edwin Hubble observed that the light from galaxies that are moving away from the Earth showed a *red-shift*.

What is *red-shift* ?

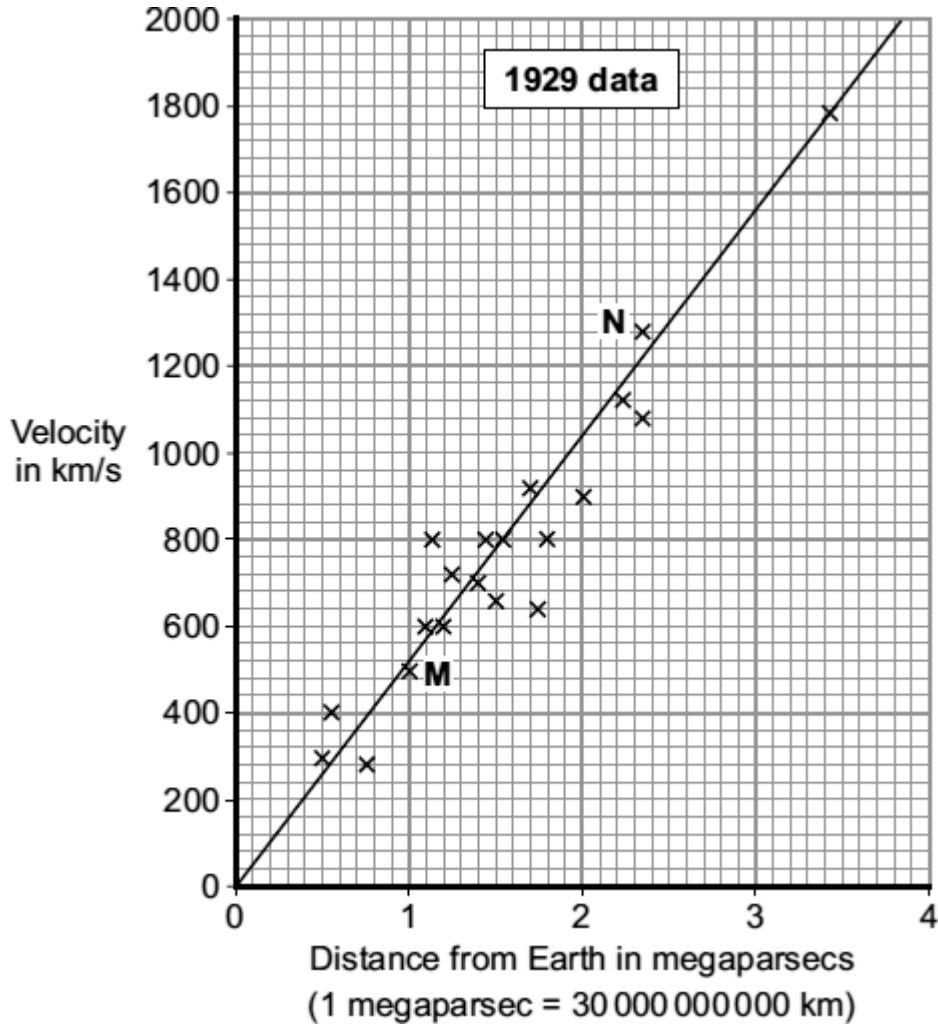
.....

.....

(1)

- (b) By measuring the *red-shift*, Hubble was able to calculate the speed at which the galaxies are moving away from the Earth. He was also able to calculate the distance of these galaxies from the Earth.

The graph shows some of the data calculated by Hubble.



- (i) The data from two galaxies, **M** and **N**, has been included in the graph. The light from galaxy **M** has a smaller *red-shift* than the light from galaxy **N**.

What does the difference in *red-shift* tell scientists about the two galaxies, **M** and **N**?

.....

.....

.....

(2)

- (ii) The gradient of the line drawn on the graph gives a number known as the Hubble constant. The Hubble constant can be used to estimate when the universe began.

Use the graph to calculate the value of the Hubble constant.

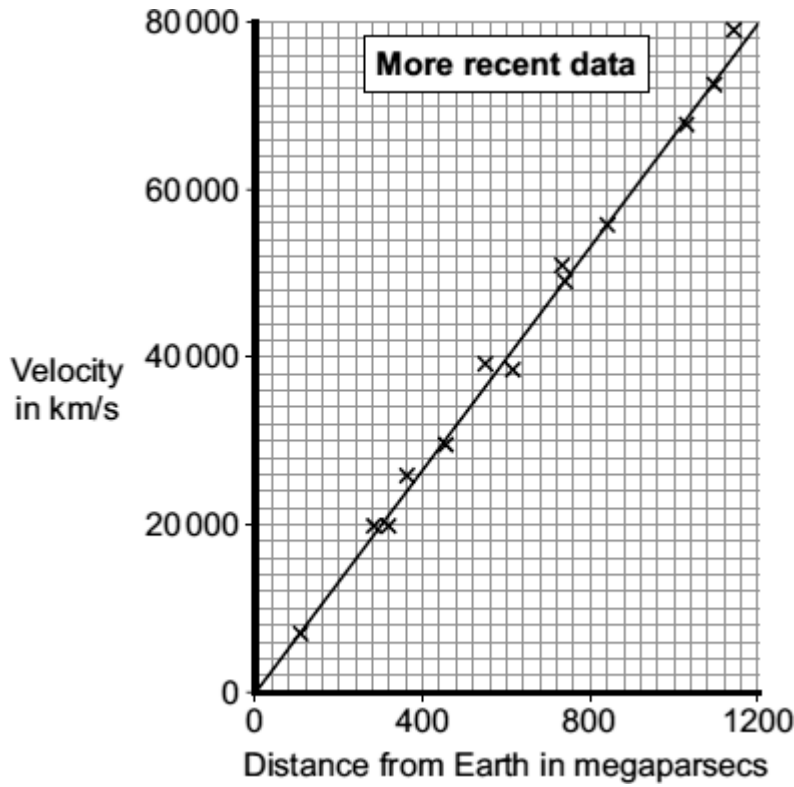
Show clearly how you obtained your answer.

.....
.....

Hubble constant = km/s per megaparsec

(2)

(iii) More recently, data has been obtained from more distant galaxies.



The results from the more recent data give a totally different value for the Hubble constant to the one calculated from the 1929 data.

Which set of data, the 1929 or the more recent, is most likely to give the value closest to the true value for the Hubble constant?

Draw a ring around your answer.

1929

more recent

Give a reason for your answer.

.....
.....

(1)

- (c) The Andromeda galaxy is not moving away from the Earth. It is actually moving towards the Earth. This means that the light from Andromeda shows a blue-shift.

How do the wavelength and frequency of the light from Andromeda seem to have changed when viewed from the Earth?

.....
.....
.....
.....

(2)
(Total 8 marks)

12

The 'steady state' theory was once a popular alternative to the 'big bang' theory.

The 'steady state' theory suggested that the universe, although expanding, had no origin and it has always existed. As the universe expands, a small amount of matter is created to keep the universe looking exactly the same all of the time.

- (a) When considering the origin of the universe, what is the difference between the 'big bang' theory and the 'steady state' theory?

.....
.....
.....
.....

(2)

- (b) The light from distant galaxies shows a *red-shift*.

- (i) What is *red-shift*?

.....
.....

(1)

(ii) Why does red-shift provide evidence to support both the 'big-bang' theory and the 'steady state' theory?

.....
.....
.....
.....

(2)

(c) The 'steady state' theory was important in encouraging new research into the universe. Suggest a reason why scientists were keen to carry out new research.

.....
.....

(1)

(d) Scientists can answer many questions about the universe, but not the question: 'Why was the universe created?'

Suggest a reason why this question cannot be answered by scientists.

.....
.....

(1)

(Total 7 marks)

13

Read the passage.

In the SolarSystem, the inner planets, such as the Earth, contain elements which are eavierthan the elements hydrogen and helium.
Our star,the Sun, is a medium sized star. If a star is much more massive than the Sunit will eventually swell into a red giant, start to contract, continue tocontract and finally explode.

(a) What is the explosion called?

.....

(1)

- (b) Explain why scientists believe that the Solar System was formed from the material produced when earlier stars exploded.

.....

.....

.....

.....

.....

.....

(3)
(Total 4 marks)

14

- (a) Complete the **two** spaces in the sentence.

Stars form when enough and gas from are pulled together by gravitational attraction.

(2)

- (b) How are stars able to give out energy for millions of years?

Put a tick (✓) next to the answer.

By atoms joining together

By atoms splitting apart

By burning gases

(1)

- (c) There are many billions of stars in our galaxy. Our Sun is one of these stars. What is the name of our galaxy?

.....

(1)

(d)

Why was the Universe created?

We cannot expect scientists to answer this question. What is the reason for this?

Put a tick (✓) next to the reason.

It will take too long to collect the scientific evidence.

The answer depends on beliefs and opinions, not scientific evidence.

There is not enough scientific evidence.

(1)
(Total 5 marks)

15

Light is given out by the Sun and a distant galaxy.

(a) Compared to the light from the Sun, the light from the distant galaxy has moved towards the red end of the spectrum.

(i) What name is given to this effect?

.....

(1)

(ii) Complete the following sentence by drawing a ring around the line in the box that is correct.

The fact that light from a distant galaxy seems to move towards the red end of

the spectrum gives scientists evidence that

galaxies are shrinking
galaxies are changing colour
the universe is expanding

(1)

(b) Scientists have a theory that the universe began from a very small point and then exploded outwards.

(i) What name is given to this theory?

.....

(1)

- (ii) Which statement gives a reason why scientists think that the universe began with an explosion?

Put a tick (✓) in the box next to your choice.

At the moment it is the best way of explaining our scientific knowledge.


It can be proved using equations.

People felt the explosion.

(1)
(Total 4 marks)

16

The visible part of the electromagnetic spectrum from a star includes a dark line. This line is at a specific wavelength. The diagram shows the position of the dark line in the spectrum from the Sun and in the spectrum from a distant galaxy.



(a) Explain how the spectrum 'shift' of the dark line supports the theory that the Universe began from a very small point.

.....

.....

.....

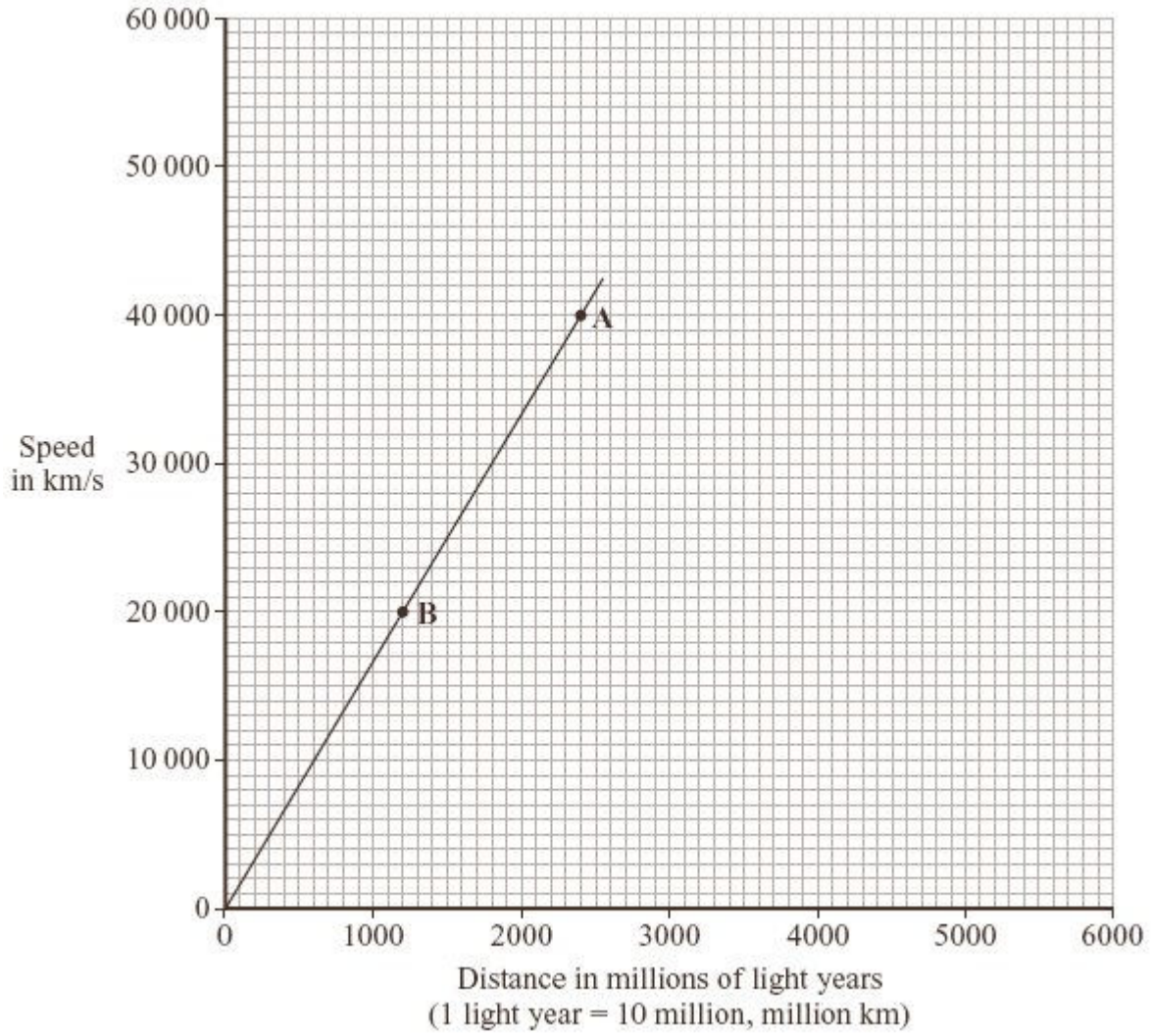
.....

.....

.....

(3)

- (b) From data collected, a graph can be drawn that links the speed of a galaxy with the distance of the galaxy from the Earth.



- (i) How does the visible light spectrum from galaxy **A** look different from the visible light spectrum from galaxy **B**?

.....
.....

(1)

- (ii) A third galaxy, **C**, seems to be travelling away from the Earth at about 60 000 km/s.

Estimate how far galaxy **C** might be from the Earth, showing how you use the graph to do this.

.....

Distance between galaxy **C** and the Earth = million light y

(2)
 (Total 6 marks)

17

- (a) Satellites fitted with various telescopes orbit the Earth. These telescopes detect different types of electromagnetic radiation.

Why are telescopes that detect different types of electromagnetic waves used to observe the Universe?

.....

(1)

- (b) In 2005 a space telescope detected a star that exploded 13 billion years ago. The light from the star shows the biggest *red-shift* ever measured.

- (i) What is *red-shift*?

.....

(1)

- (ii) What does the measurement of its red-shift tell scientists about this star?

.....

(1)

- (c) Red-shift provides evidence for the 'big bang' theory.

(i) Describe the 'big bang' theory.

.....
.....
.....
.....

(2)

(ii) Suggest what scientists should do if new evidence were found that did not support the 'big bang' theory.

.....
.....
.....

(1)

(Total 6 marks)

18

(a) The light spectrum from a distant galaxy shows a red shift.

What is meant by *red shift* and what does it tell us about distant galaxies?

.....
.....
.....
.....

(2)

(b) What name is given to the theory that the Universe started with a massive explosion?

.....

(1)

(Total 3 marks)

19

The Big Bang theory attempts to explain the origin of the Universe.

(i) What is the Big Bang theory?

.....
.....

(1)

(ii) What can be predicted from the Big Bang theory about the size of the Universe?

.....

(1)

(Total 2 marks)

20

The Big Bang theory attempts to explain the origin of the Universe.

(i) What is the Universe?

.....
.....

(1)

(i) What are the main ideas of the Big Bang theory?

.....
.....
.....

(2)

(iii) What is thought to be happening to the size of the Universe?

.....

(1)

(Total 4 marks)

21

Explain how observations at the red end of the spectrum of light from galaxies have led to one theory about the origin of the Universe.

.....

.....

.....

.....

.....

.....

.....

.....

.....

(Total 6 marks)

22

Astronomers believe that the Universe is expanding.

(i) How might the Universe have started?

.....

.....

(1)

(ii) State and explain briefly, **one** piece of scientific evidence which may be used to support this belief.

.....

.....

.....

.....

(2)

(Total 3 marks)

23

Studies of light from distant galaxies have provided evidence for the theory that the Universe started from one place and is expanding. Explain how.

.....
.....
.....
.....
.....

(Total 3 marks)

24

'Red shift' is one of the pieces of evidence which led scientists to propose the 'big bang' theory.

(a) Describe the big bang theory.

.....
.....
.....
.....

(2)

(b) *To gain full marks for this question you should write your ideas in good English. Put them into a sensible order and use the correct scientific words.*

Explain how red shift provides evidence for the big bang theory.

.....
.....
.....
.....
.....
.....

(3)

(Total 5 marks)

25

Astronomers use red shift in two ways.
 They calculate the distance to each galaxy from Earth.
 They also calculate the speed at which galaxies are moving away from Earth.

The table shows some results. Distance is given in zettametres, Zm. One zettametre is 10^{21} metres.

Galaxy	Distance from Earth to galaxy in Zm	Speed at which galaxy is moving away from us in Zm per billion years	Time the galaxy has been moving away from us in billions of years (Calculated by distance ÷ speed)
Abell 963	25 000	1950	12.8
Abell 1302	14 000	1100	
Abell 1314	4 100	320	12.8
Abell 1978	18 000	1400	12.9
Abell 2255	10 000	770	13.0

(a) Complete the data for Abell 1302.

(1)

(b) Describe the relationship between the distance to a galaxy and the speed at which the galaxy is moving away from us.

.....

(1)

(c) Explain how the data for time provides evidence for the theory that the origin of the Universe was a huge explosion ('big bang').

.....

(2)

(Total 4 marks)

26

What does the Big Bang theory state? In your answer you may include evidence for the theory.

.....

.....

.....

.....

.....

.....

.....

(Total 4 marks)

27

Explain, in as much detail as you can, the scientific evidence for the “big bang” theory of the origin of the Universe.

.....

.....

.....

.....

.....

.....

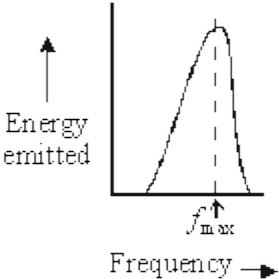
.....

(Total 5 marks)

28

Read the following information about cosmic microwave background radiation.

Then use it to answer the questions below.

<p>A Microwave “noise” reaches Earth with almost the same intensity from every direction. It is called cosmic microwave background radiation.</p>	<p>B All bodies with a temperature above zero kelvin (-273°C) emit electromagnetic radiation.</p>	<p>C Measurements made by the COBE satellite showed that there are very slight “ripples” in the cosmic microwave background radiation.</p>
<p>D Bodies which emit radiation do so across a range of frequencies, as shown on the graph.</p> 	<p>E Radiation in the microwave region of the electromagnetic spectrum reaches Earth from many stars and galaxies.</p>	<p>F In 1965, the astronomers Penzias and Wilson stopped trying to eliminate “noise” from their microwave detectors and studied it instead.</p>
<p>G The frequency at which a body radiates most energy (f_{max}) is directly proportional to the kelvin temperature.</p>	<p>H Cosmic microwave background radiation has an energy profile matching a temperature of 3 kelvin (-270°C).</p>	<p>I Because of the expansion of the Universe, the temperature of radiation from the time of the big bang will now be only a few kelvin.</p>
<p>J The early universe could not have been completely uniform otherwise galaxies would never have formed.</p>		

(You may find it helpful to begin by deciding which items of information belong to which question.)

(a) Explain, as fully as you can, why the frequency profile of electromagnetic radiation is an indication of temperature.

.....
.....
.....
.....
.....
.....

(3)

(b) Describe, in as much detail as you can, what cosmic microwave background radiation is and how it was discovered.

.....
.....
.....
.....
.....

(3)

(c) Explain, as fully as you can, how cosmic microwave background radiation fits in with the idea that the Universe, as it now is, began with a big bang.

.....
.....
.....
.....
.....

(4)

- (d) Some people think that Penzias and Wilson's discovery of cosmic microwave background radiation was just lucky. Others disagree.

What do you think? Give reasons for your answer.

.....

.....

.....

.....

(2)
(Total 12 marks)